

<b>Monday</b>	<b>Tuesday</b>	<b>Wednesday</b>	<b>Thursday</b>	<b>Friday</b>
Can I measure time in minutes and seconds?	Can I read and write the time to o'clock on an analogue clock?	Can I read and write the time to half past on an analogue clock?	Can I read the time to o'clock and half past on an analogue clock?	Can I solve time problems?

**Link to website / lesson video:**







<https://classroom.thenational.academy/lessons/explore-adding-on-hours-and-half-hours-6njpad?step=2&activity=video>

**NEW LEARNING: Reading and writing the time to o'clock and half past on an analogue clock**

**To start: What time do the clock faces read?**

(Play video from beginning)

**What time do the clock faces read?**



**Tip: Pause the video, then check your answers!**

**Read and say the key words:**

minute hand



hour hand

o'clock

straight up



half past


halfway



Recap yesterday's learning and complete the activity below.

(Play video at 2:20)

Answer the questions on the video.



**INDEPENDENT TASK**

**TO START**

(Play video at 4.50)

Watch the video and have ago at these questions, the answers are provided on the video.

Little Red Riding Hood needs to go to the market to buy some bread for her Grandma. She leaves her house at 3 o'clock. It takes her an hour to get the bread. What time does she get home?

Little Red Riding Hood goes for a walk at half past 10. She is out for half an hour. What time does she get home?

Check your answers on the video.

**MOVING ON:**

Solve the time problems below:

(Play video at 7:56)

1. Kate does her homework at 4 o'clock. It takes her one hour. What time does she finish?

---



2. Tom makes some cookies. He puts them in the oven at half past 2. They take an hour to cook. What time are they cooked?

---

3. A cartoon starts at 6 o'clock. It's on for one hour. What time does it finish?


---

Check your answers on the video.

#### CHALLENGE

Have a go at this interactive quiz from the BBC!

<https://www.bbc.co.uk/bitesize/clips/zfn9jxs>



	<b>Success Criteria / Checklist</b>	<b>Achieved</b>
<b>1</b>	<b>I can read the time to half past</b>	
<b>2</b>	<b>I can read and solve word problems</b>	
<b>3</b>	<b>I can tell the time to o'clock and half past on an analogue clock</b>	

**What did I find easy?**

---

---

**What did I find difficult?**

---

---

---